





Sharing at the Teddy Bears' Picnic

The teddy bears are having a picnic. Can you help them share their food so they have the **same** amount each?




Extension: Make your own teddy bear's picnic. You could use plastic food, make your own out of paper or use coloured blocks to pretend.


Ladybird Halving to 10




Half of 2 is _____




Half of 4 is _____



Half of 6 is _____



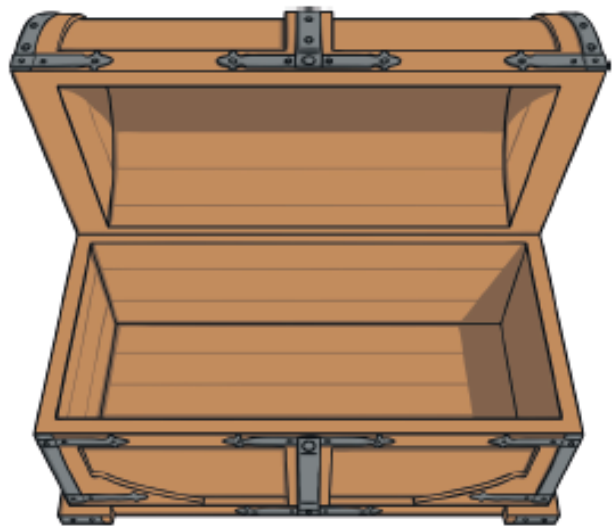
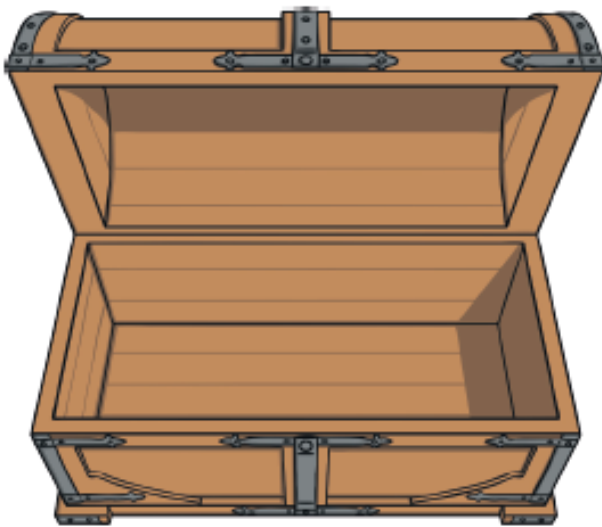
Half of 8 is _____



Half of 10 is _____

Extension: Make yourself a large ladybird or butterfly with different amounts of spots (1-20).
Practise sharing the dots to halve the amount...Can you record it as a number sentence?
(e.g. $4 = 2 + 2$)

Half the Pirate Treasure



visit [twinkl.com](https://www.twinkl.com)



Extension: Do you have treasure chests at home? Can you share treasure between the chests fairly? If there are 12 ruby's how many do they get each? How could we work it out? Empty jewellery boxes are great if you don't have treasure chest and could use a variety of things as treasure (buttons, sequins, 1p coins, beads).

Doubling and Halving

★★

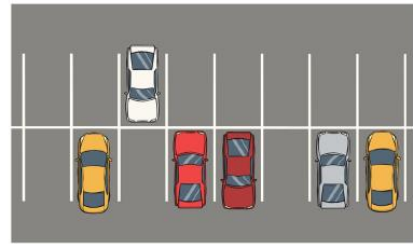
24. One ladybird has 12 spots. The second ladybird has half the number of spots of the first ladybird. **How many spots does the second ladybird have?**



Doubling and Halving

★★

25. There were 6 cars in a car park. Half of them were driven home. **How many cars were left in the car park?**



Doubling and Halving

★★

26. 8 children were playing a game of football. Half of them were wearing red shirts. **How many of them were wearing red shirts?**



Doubling and Halving

★★

27. A car has 4 tyres. Half of the tyres have a puncture. **How many tyres need to be repaired?**



Doubling and Halving

★★

28. Josie has 2 cupcakes. **She eats half of them. How many cupcakes are left?**



Doubling and Halving

★★

29. There were 10 caterpillars in the tree. Half of them became butterflies. **How many butterflies were there?**



Doubling and Halving

★★

30. A van has four wheels. **How many wheels do two vans have?**



Doubling and Halving

★★★

31. A bus was taking 20 children on a trip. Half of them were girls. **How many were boys?**

